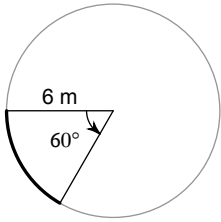


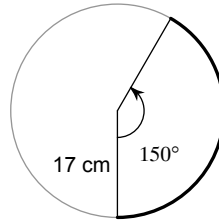
# Unit 7 - Trigonometry - Arc Length & Sector Area

Find the length of each arc. Round your answers to the nearest tenth.

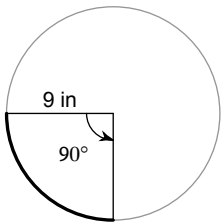
1)



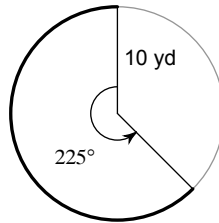
2)



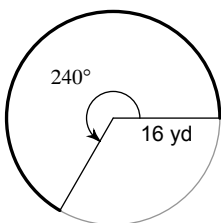
3)



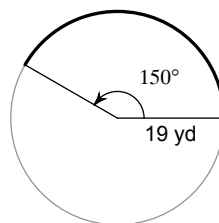
4)



5)

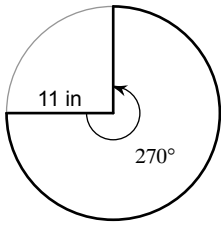


6)

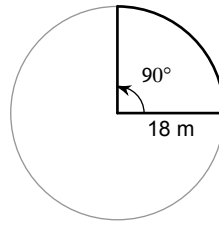


Find the area of each sector. Round your answers to the nearest tenth.

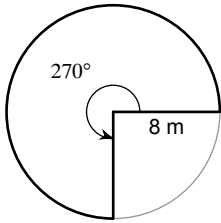
7)



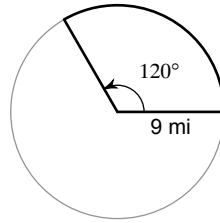
8)



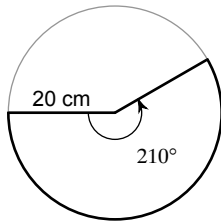
9)



10)



11)



12)

