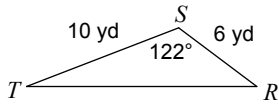


Area of Triangle Using Trigonometry

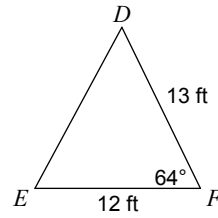
Name _____

Find the area of each triangle to the nearest tenth.

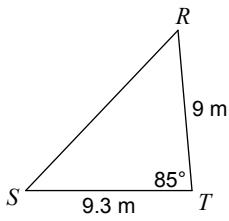
1)



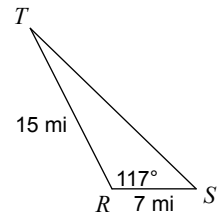
2)



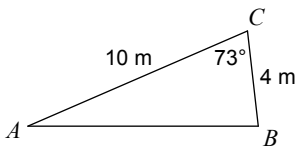
3)



4)



5)



6)

