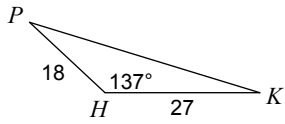
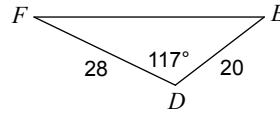


Find each measurement indicated. Round your answers to the nearest tenth.

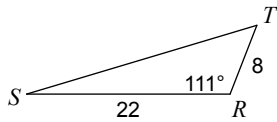
1) Find KP



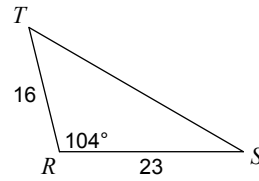
2) Find EF



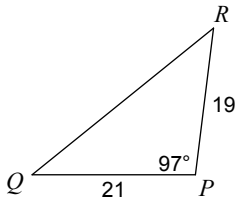
3) Find ST



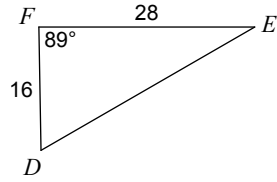
4) Find ST



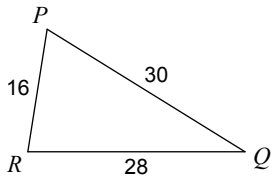
5) Find QR



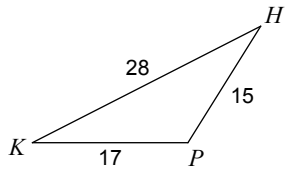
6) Find DE



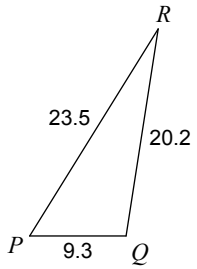
7) Find $m\angle Q$



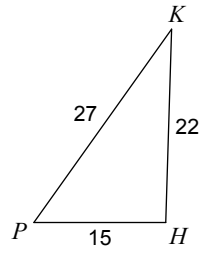
8) Find $m\angle K$



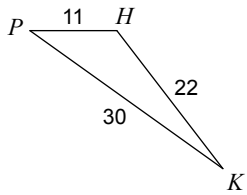
9) Find $m\angle R$



10) Find $m\angle P$



11) Find $m\angle K$



12) Find $m\angle T$

