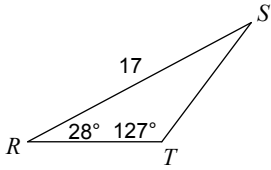


Unit 7 - Trigonometry - Law of Sines

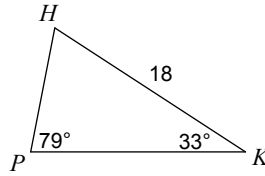
Name _____

Find each measurement indicated. Round your answers to the nearest tenth.

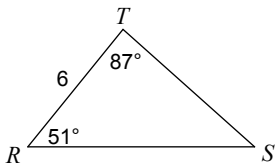
1) Find ST



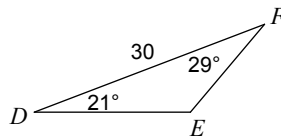
2) Find HP



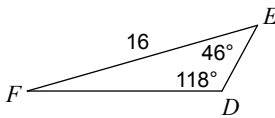
3) Find ST



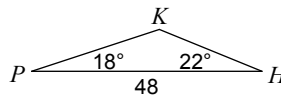
4) Find EF



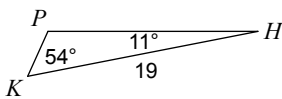
5) Find DF



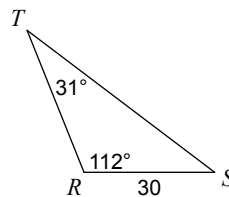
6) Find HK



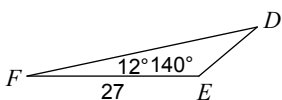
7) Find KP



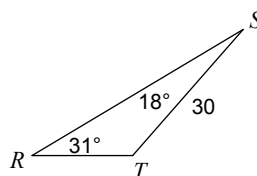
8) Find ST



9) Find DE

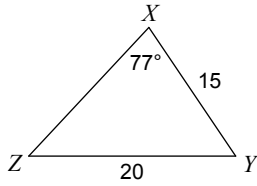


10) Find RT

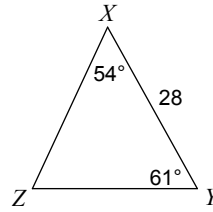


Solve each triangle. Round your answers to the nearest tenth.

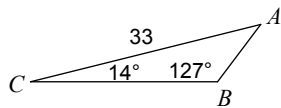
11)



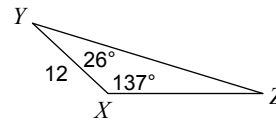
12)



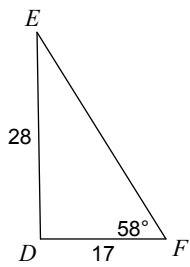
13)



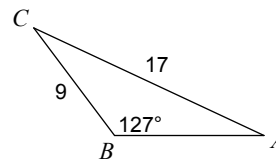
14)



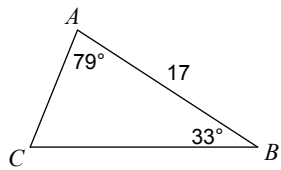
15)



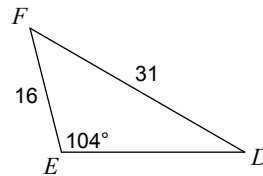
16)



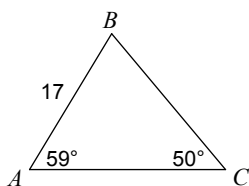
17)



18)



19)



20)

