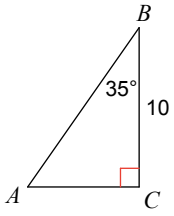


Unit 7 - Trigonometry - Solving Triangles

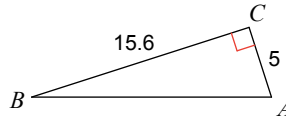
Name _____

Solve each triangle. Round answers to the nearest tenth.

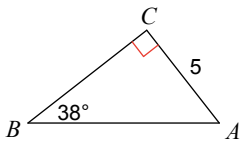
1)



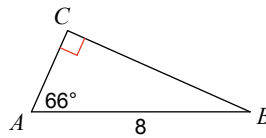
2)



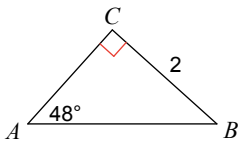
3)



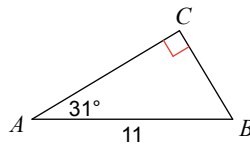
4)



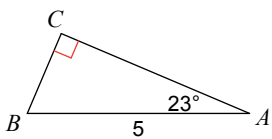
5)



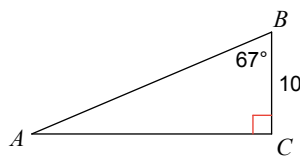
6)



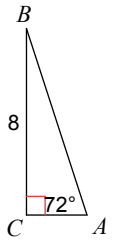
7)



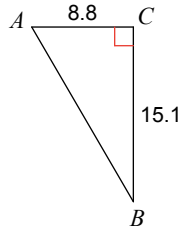
8)



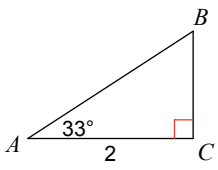
9)



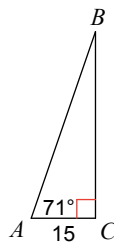
10)



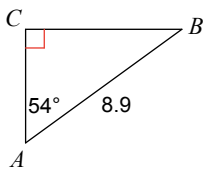
11)



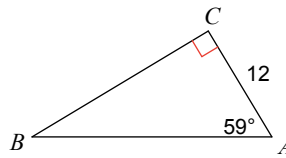
12)



13)



14)



15)

