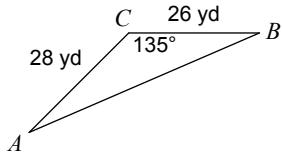
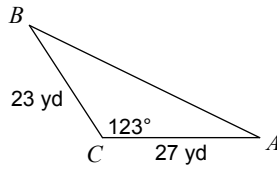


Find each measurement indicated. Round your answers to the nearest tenth.

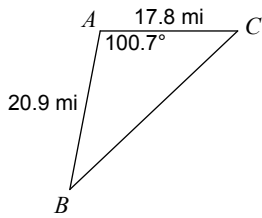
1) Find AB



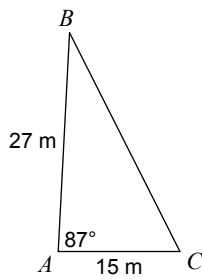
2) Find AB



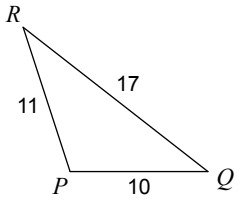
3) Find BC



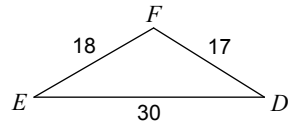
4) Find BC



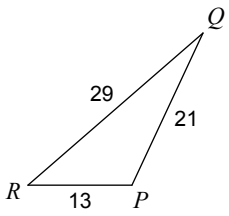
5) Find $m\angle R$



6) Find $m\angle F$



7) Find $m\angle R$



8) Find $m\angle R$

