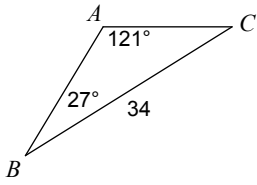


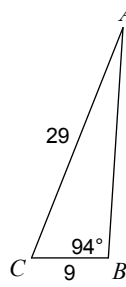
Unit 7 - Warm Up #6 - Law of Sines/Cosines

Find each measurement indicated. Round your answers to the nearest tenth.

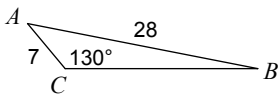
1) Find AC



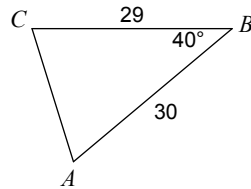
2) Find $m\angle A$



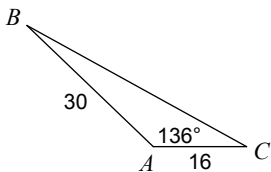
3) Find $m\angle B$



4) Find AC



5) Find BC



6) Find $m\angle A$

